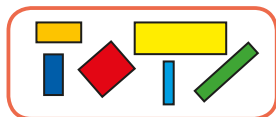


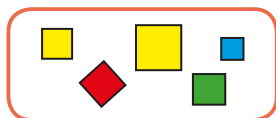
1 Match the groups of shapes to the labels.



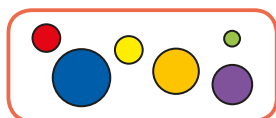
rectangles



circles


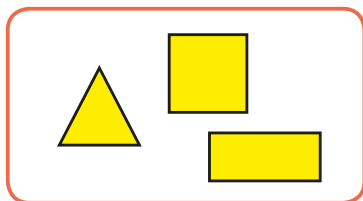


triangles

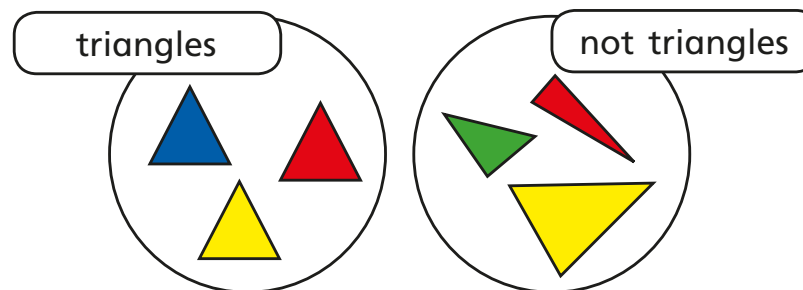


squares

2 How have the shapes been sorted?



3 Eva has sorted some shapes.



- a) Is Eva correct?
- b) Draw a shape that is not a triangle.



4 Sort the shapes into groups.

The first one has been done for you.

